

Name: _____

Primary 5-a-day

Gold



1st April

$$2^{\dots} = 49$$

$$1,944 \div 9$$

Grid area for the first problem.

Grid area for the second problem.

The lengths of time that it takes to complete a jigsaw are below.

Arrange the times in order, starting with the shortest.

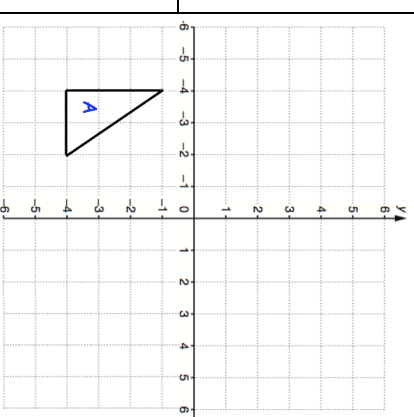
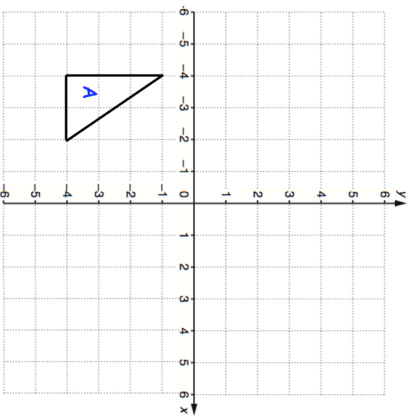
- 0.5 hours
- 1.25 hours
- 100 minutes
- 0.75 hours
- 40 minutes

Reflect triangle A in the x-axis

Reflect triangle A in the x-axis

Plot the point (5, -1)

Plot the point (5, -1)



Name: _____

Primary 5-a-day

Gold



1st April

$$2^{\dots} = 49$$

$$1,944 \div 9$$

Grid area for the first problem.

Grid area for the second problem.

The lengths of time that it takes to complete a jigsaw are below.

Arrange the times in order, starting with the shortest.

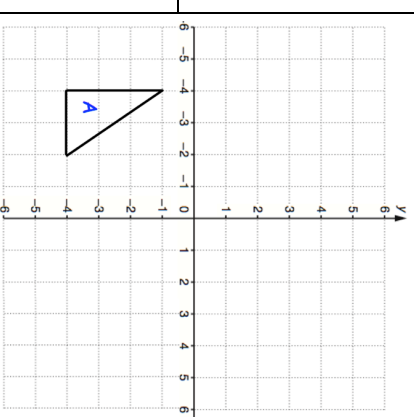
- 0.5 hours
- 1.25 hours
- 100 minutes
- 0.75 hours
- 40 minutes

Reflect triangle A in the x-axis

Reflect triangle A in the x-axis

Plot the point (5, -1)

Plot the point (5, -1)



Name: _____

Primary 5-a-day

Gold



2nd April

Simplify $\frac{12}{16}$

--

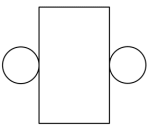
720×9

--

James earns £12 per hour.
He works 19 hours in one week.
He gives 10% of his earning to his sister.

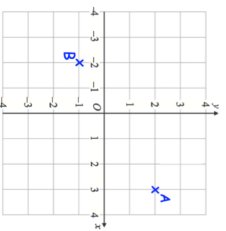
How much does he give to his sister?

Sketch the 3D shape.



This is the net for a 3D shape.

Write down the coordinates of A.



Write down the coordinates of B

Name: _____

Primary 5-a-day

Gold



2nd April

Simplify $\frac{12}{16}$

--

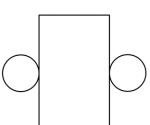
720×9

--

James earns £12 per hour.
He works 19 hours in one week.
He gives 10% of his earning to his sister.

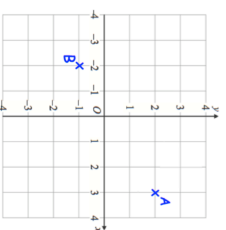
How much does he give to his sister?

Sketch the 3D shape.



This is the net for a 3D shape.

Write down the coordinates of A.



Write down the coordinates of B

Name: _____

Primary 5-a-day

Gold

3rd April



$$50.4 - 11.58$$

--	--

$$\begin{array}{r} 84 \\ \times 26 \\ \hline \end{array}$$

--	--

From this list of numbers

- 8 9 10 11 12 13 14

Write down a cube number

Write down a prime number

Dodgems
£1.25
each ride

Rollercoaster
£3.50
each ride

Ciaran spends £12 altogether on the Dodgems and the Rollercoaster. He goes on the Rollercoaster twice

How many times does he go on the Dodgems?

Here are six number cards

- $\frac{1}{2}$ $\frac{1}{1\frac{1}{2}}$ 1 2 $2\frac{1}{2}$ $3\frac{1}{2}$

Use three of the number cards to make this calculation correct:

$$\left(\square + \square \right) \times \square = 9$$

Name: _____

Primary 5-a-day

Gold

3rd April



$$50.4 - 11.58$$

--	--

$$\begin{array}{r} 84 \\ \times 26 \\ \hline \end{array}$$

--	--

From this list of numbers

- 8 9 10 11 12 13 14

Write down a cube number

Write down a prime number

Dodgems
£1.25
each ride

Rollercoaster
£3.50
each ride

Ciaran spends £12 altogether on the Dodgems and the Rollercoaster. He goes on the Rollercoaster twice

How many times does he go on the Dodgems?

Here are six number cards

- $\frac{1}{2}$ $\frac{1}{1\frac{1}{2}}$ 1 2 $2\frac{1}{2}$ $3\frac{1}{2}$

Use three of the number cards to make this calculation correct:

$$\left(\square + \square \right) \times \square = 9$$

Name: _____

Primary 5-a-day

Gold

4th April



$$-20 + 14$$

Grid area for the first problem with a rectangular box for the answer.

$$600 \div 20$$

Grid area for the second problem with a rectangular box for the answer.

A cupcake with a cherry costs 10p more than a cupcake without a cherry. Amber bought three of each cake. They cost £1.80 altogether. What is the cost of a cupcake without a cherry?




Harry makes a sequence of numbers starting with 400.

He subtracts 175 each time
Write the next two numbers

400 225 50

The perimeter of this rectangle is 60cm

Calculate the length of the rectangle



Name: _____

Primary 5-a-day

Gold

4th April



$$-20 + 14$$

Grid area for the first problem with a rectangular box for the answer.

$$600 \div 20$$

Grid area for the second problem with a rectangular box for the answer.

A cupcake with a cherry costs 10p more than a cupcake without a cherry. Amber bought three of each cake. They cost £1.80 altogether. What is the cost of a cupcake without a cherry?




Harry makes a sequence of numbers starting with 400.

He subtracts 175 each time
Write the next two numbers

400 225 50

The perimeter of this rectangle is 60cm

Calculate the length of the rectangle



Name: _____

Primary 5-a-day

Gold

5th April



79×50	$405.1 \div 10$
Shape A has been translated to Shape B	Complete this sentence Shape A has been translated <input type="checkbox"/> squares to the left and <input type="checkbox"/> squares upwards
	Translate shape B 2 squares right and 1 squares down
Circle two decimals that have a difference of 0.5 0.3 0.35 0.4 0.45 0.7 0.85	

Name: _____

Primary 5-a-day

Gold

5th April



79×50	$405.1 \div 10$
Shape A has been translated to Shape B	Complete this sentence Shape A has been translated <input type="checkbox"/> squares to the left and <input type="checkbox"/> squares upwards
	Translate shape B 2 squares right and 1 squares down
Circle two decimals that have a difference of 0.5 0.3 0.35 0.4 0.45 0.7 0.85	

Name: _____

Primary 5-a-day

Gold



6th April

$$0.58 \times 1,000$$

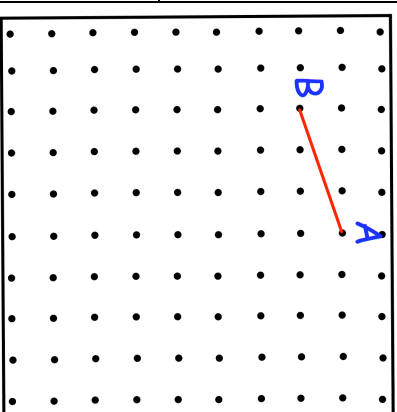
$$\frac{5}{6} \text{ of } 1,422$$

Here is a grid of dots

Points A and B are joined by straight lines.

Draw a line to join point B to another dot on the grid so that the two lines make a right angle

Draw a line parallel to AB



Write **all** the numbers between 40 and 200 that are **factors of 300**

Name: _____

Primary 5-a-day

Gold



6th April

$$0.58 \times 1,000$$

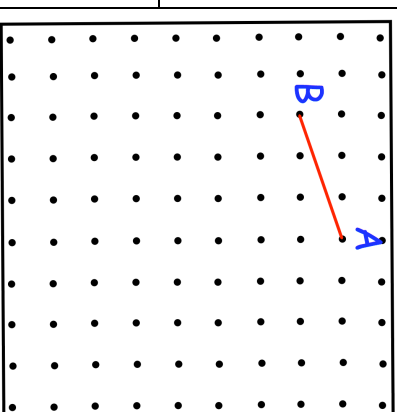
$$\frac{5}{6} \text{ of } 1,422$$

Here is a grid of dots

Points A and B are joined by straight lines.

Draw a line to join point B to another dot on the grid so that the two lines make a right angle

Draw a line parallel to AB



Write **all** the numbers between 40 and 200 that are **factors of 300**

Name: _____

Primary 5-a-day

Gold



7th April

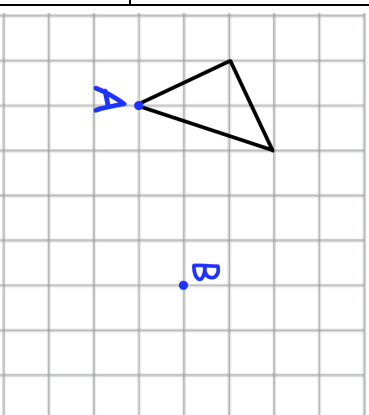
25% of 312

3^3

Here is a triangle on a square grid.

The triangle is translated so that point A moves to point B.

Draw the triangle in the new position.



Draw a rhombus on the grid

Two of the fractions are **equivalent**

Circle them

- $\frac{2}{3}$ $\frac{12}{15}$ $\frac{9}{12}$ $\frac{16}{20}$ $\frac{6}{10}$

Name: _____

Primary 5-a-day

Gold



7th April

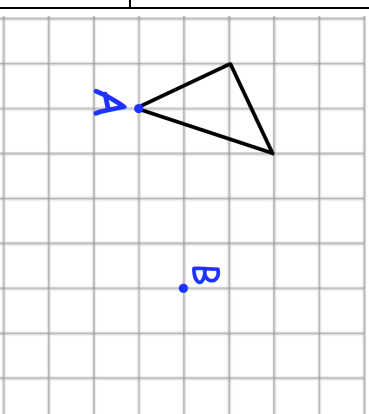
25% of 312

3^3

Here is a triangle on a square grid.

The triangle is translated so that point A moves to point B.

Draw the triangle in the new position.



Draw a rhombus on the grid

Two of the fractions are **equivalent**

Circle them

- $\frac{2}{3}$ $\frac{12}{15}$ $\frac{9}{12}$ $\frac{16}{20}$ $\frac{6}{10}$

Name: _____

Primary 5-a-day

Gold

8th April



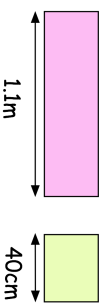
10% of 700

$$\frac{9}{10} - \frac{2}{5}$$

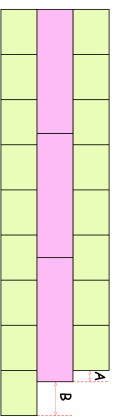
Grid area for solving 10% of 700. Includes a blank rectangular box for the answer.

Grid area for solving $\frac{9}{10} - \frac{2}{5}$. Includes a blank rectangular box for the answer.

Calculate the length of A



Toby makes a pattern with the rectangles above



Calculate the length of B

Chloe has completed her homework.

What has Chloe done wrong?

(a) $\frac{3}{4} = \frac{4}{16}$

(b) $\frac{3}{5} = \frac{6}{15}$

Name: _____

Primary 5-a-day

Gold

8th April



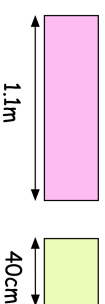
10% of 700

$$\frac{9}{10} - \frac{2}{5}$$

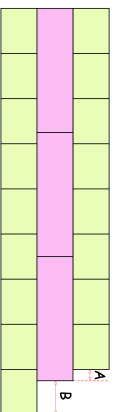
Grid area for solving 10% of 700. Includes a blank rectangular box for the answer.

Grid area for solving $\frac{9}{10} - \frac{2}{5}$. Includes a blank rectangular box for the answer.

Calculate the length of A



Toby makes a pattern with the rectangles above



Calculate the length of B

Chloe has completed her homework.

What has Chloe done wrong?

(a) $\frac{3}{4} = \frac{4}{16}$

(b) $\frac{3}{5} = \frac{6}{15}$

Name: _____

Primary 5-a-day

Gold

9th April



$$9 \times 8 \times 7 \times 5$$

$$5 \frac{1}{2} = \frac{\square}{2}$$

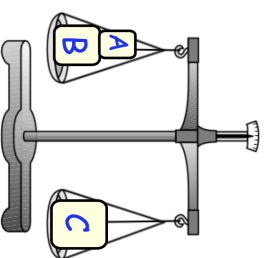
Craig has three blocks.

Blocks A and B together weight the same as block C.

The three blocks weigh 1.3kg altogether.

Block A weighs 50g less than block B.

How much does block B weigh?



Ava says that all the factors of 21 are **odd**

Is Ava correct?

Name: _____

Primary 5-a-day

Gold

9th April



$$9 \times 8 \times 7 \times 5$$

$$5 \frac{1}{2} = \frac{\square}{2}$$

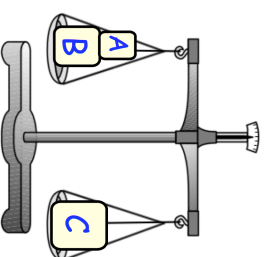
Craig has three blocks.

Blocks A and B together weight the same as block C.

The three blocks weigh 1.3kg altogether.

Block A weighs 50g less than block B.

How much does block B weigh?



Ava says that all the factors of 21 are **odd**

Is Ava correct?

Name: _____

Primary 5-a-day

Gold



10th April

$$\frac{3}{7} = \frac{\square}{35}$$

$$38,000 - 2,779$$

In a town in Cornwall, it rained for 18 days during April.

What fraction of the month did it rain?

Tick each multiplication that has an answer **greater** than 1000.

$$9 \times 10 \times 11$$

$$9 \times 9 \times 13$$

$$14 \times 6 \times 11$$

$$19 \times 18 \times 3$$

$$5 \times 5 \times 39$$

Name: _____

Primary 5-a-day

Gold



10th April

$$\frac{3}{7} = \frac{\square}{35}$$

$$38,000 - 2,779$$

In a town in Cornwall, it rained for 18 days during April.

What fraction of the month did it rain?

Tick each multiplication that has an answer **greater** than 1000.

$$9 \times 10 \times 11$$

$$9 \times 9 \times 13$$

$$14 \times 6 \times 11$$

$$19 \times 18 \times 3$$

$$5 \times 5 \times 39$$

Name: _____

Primary 5-a-day

Gold



11th April

$$\frac{1}{4} + \frac{5}{12} + \frac{1}{4}$$

$$500 - 530$$

Grid area for the first problem.

Grid area for the second problem.

Noah chooses a **prime number**

He rounds it to the nearest ten.

His answer is 20.

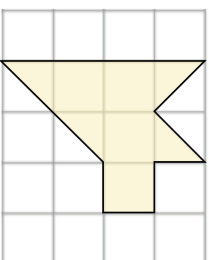
Write down all the possible prime numbers
Noah could have chosen.

Find the size of angle x



Here is a grid of 20 squares.

What percentage of the grid is shaded?



Name: _____

Primary 5-a-day

Gold



11th April

$$\frac{1}{4} + \frac{5}{12} + \frac{1}{4}$$

$$500 - 530$$

Grid area for the first problem.

Grid area for the second problem.

Noah chooses a **prime number**

He rounds it to the nearest ten.

His answer is 20.

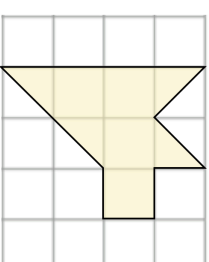
Write down all the possible prime numbers
Noah could have chosen.

Find the size of angle x



Here is a grid of 20 squares.

What percentage of the grid is shaded?



Name: _____

Primary 5-a-day

Gold



12th April

$$47 \times 24$$

$$\frac{16}{5} = 3\frac{3}{5}$$

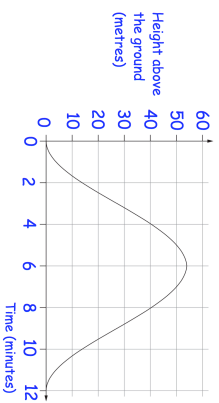
<input type="text"/>

<input type="text"/>

Jessica goes on a big wheel at a funfair.

How long did it take for the big wheel to make one complete turn?

The graph shows her height above the ground as the wheel turns



How long was Jessica over 40m above the ground?

Jodie has a bag of 3 red and 5 green marbles.

Jodie adds two red and two green marbles to the bag.

What fraction of the marbles in the bag are now green?

Name: _____

Primary 5-a-day

Gold



12th April

$$47 \times 24$$

$$\frac{16}{5} = 3\frac{3}{5}$$

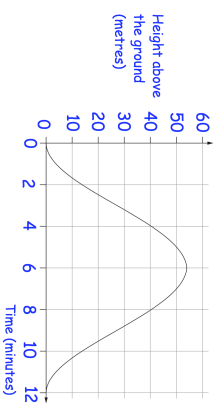
<input type="text"/>

<input type="text"/>

Jessica goes on a big wheel at a funfair.

How long did it take for the big wheel to make one complete turn?

The graph shows her height above the ground as the wheel turns



How long was Jessica over 40m above the ground?

Jodie has a bag of 3 red and 5 green marbles.

Jodie adds two red and two green marbles to the bag.

What fraction of the marbles in the bag are now green?

Name: _____

Primary 5-a-day

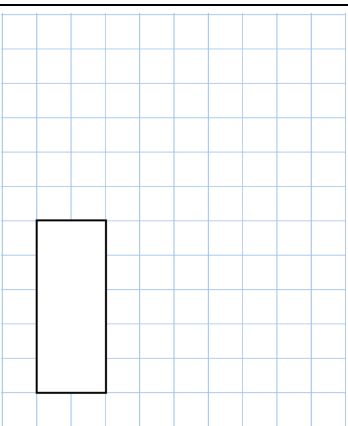
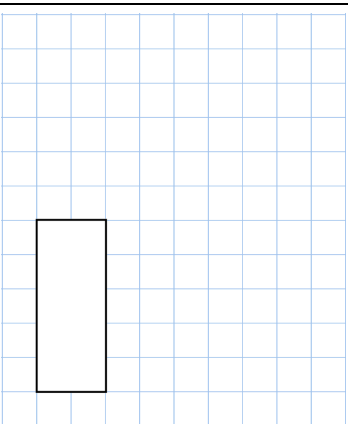
Gold



13th April

$$\begin{array}{r} 2 \\ \times 2 \\ \hline \end{array} = 16$$

$$70,004 - 608$$



Lauren has some identical rectangles


What is the perimeter of the large rectangle?

They are 13cm long and 4cm wide.

13cm

4cm

She uses four rectangles to make the larger rectangle below



What is the area of the large rectangle?

Kate has £2.80
James has £4.50

James gives Kate some money so that they now have the same amount of money.

How much does James give Kate?

Name: _____

Primary 5-a-day

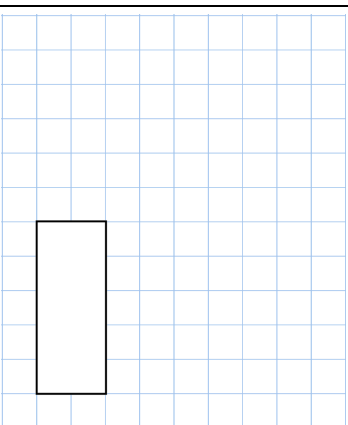
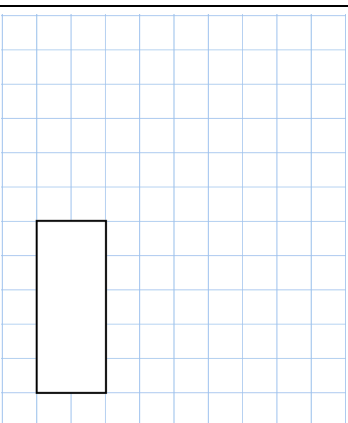
Gold



13th April

$$\begin{array}{r} 2 \\ \times 2 \\ \hline \end{array} = 16$$

$$70,004 - 608$$



Lauren has some identical rectangles


What is the perimeter of the large rectangle?

They are 13cm long and 4cm wide.

13cm

4cm

She uses four rectangles to make the larger rectangle below



What is the area of the large rectangle?

Kate has £2.80
James has £4.50

James gives Kate some money so that they now have the same amount of money.

How much does James give Kate?

Name: _____

Primary 5-a-day

Gold



15th April

10% of 34

$$\frac{1}{5} \times 2$$

<input type="text"/>

<input type="text"/>

The cost of hiring a minibus is £3 for each mile.

8 friends go on a 124 mile journey.

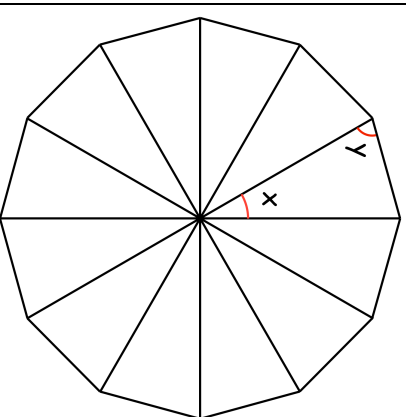
They share the cost equally

How much does each person pay?



Shown are 12 identical triangles

Find the size of angle x



Find the size of angle y

Name: _____

Primary 5-a-day

Gold



15th April

10% of 34

$$\frac{1}{5} \times 2$$

<input type="text"/>

<input type="text"/>

The cost of hiring a minibus is £3 for each mile.

8 friends go on a 124 mile journey.

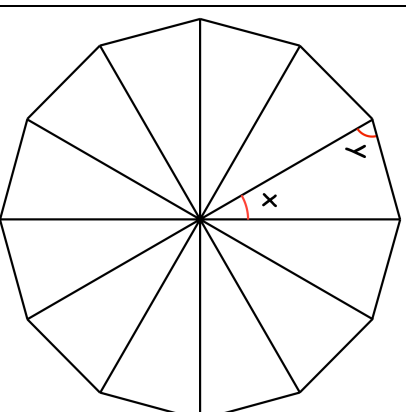
They share the cost equally

How much does each person pay?



Shown are 12 identical triangles

Find the size of angle x



Find the size of angle y

Name: _____

Primary 5-a-day

Gold



16th April

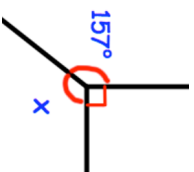
Simplify $\frac{6}{30}$

<input type="text"/>

$4.56 + 1.9 + 10.88$

<input type="text"/>

Find the size of angle x



Norman chooses two numbers:

He multiplies the two numbers and divides the result by 2.

His answer is 306.

One of Norman's numbers is 9.

Work out the mean

14 12 18 19 17

What is Norman's other number?

Name: _____

Primary 5-a-day

Gold



16th April

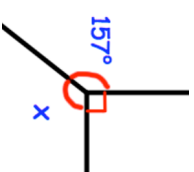
Simplify $\frac{6}{30}$

<input type="text"/>

$4.56 + 1.9 + 10.88$

<input type="text"/>

Find the size of angle x



Norman chooses two numbers:

He multiplies the two numbers and divides the result by 2.

His answer is 306.

One of Norman's numbers is 9.

Work out the mean

14 12 18 19 17

What is Norman's other number?

Name: _____

Primary 5-a-day

Gold




17th April

$$0.1 = \frac{\quad}{\quad}$$

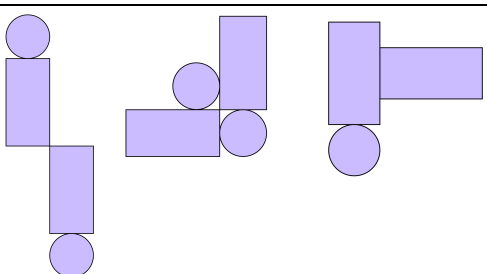
$$77 \times 91$$

Seb has some rectangular and circular tiles



He makes these patterns with them

For each pattern, put a tick if it has a line of symmetry or a cross if it does not.



Daisy chooses a **cube number**

She rounds it to the nearest hundred.

Her answer is 100.

Write down all the possible cube numbers Daisy could have chosen.

Name: _____

Primary 5-a-day

Gold




17th April

$$0.1 = \frac{\quad}{\quad}$$

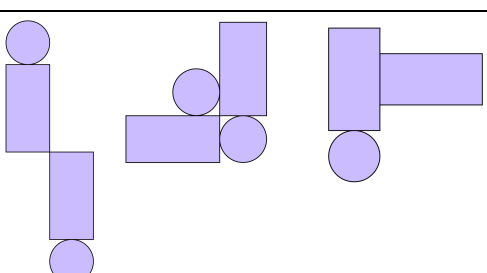
$$77 \times 91$$

Seb has some rectangular and circular tiles



He makes these patterns with them

For each pattern, put a tick if it has a line of symmetry or a cross if it does not.



Daisy chooses a **cube number**

She rounds it to the nearest hundred.

Her answer is 100.

Write down all the possible cube numbers Daisy could have chosen.

Name: _____

Primary 5-a-day

Gold

18th April



$$0.6 \div 10$$

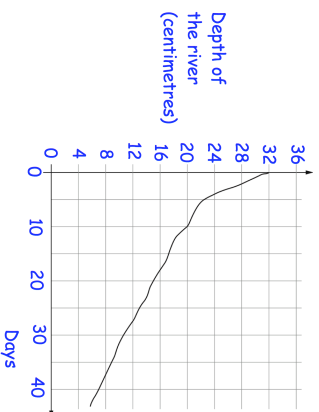
<input type="text"/>

$$2\frac{3}{5} + \frac{3}{10}$$

<input type="text"/>

Write the number that is four less than one million in figures

This graph shows the depth of a river during the summer



What is the depth of the river after 15 days?

How long does it take the river to go from a depth of 32cm to 15cm?

Name: _____

Primary 5-a-day

Gold

18th April



$$0.6 \div 10$$

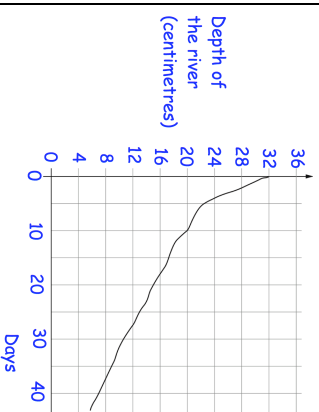
<input type="text"/>

$$2\frac{3}{5} + \frac{3}{10}$$

<input type="text"/>

Write the number that is four less than one million in figures

This graph shows the depth of a river during the summer



What is the depth of the river after 15 days?

How long does it take the river to go from a depth of 32cm to 15cm?

Name: _____

Primary 5-a-day

Gold

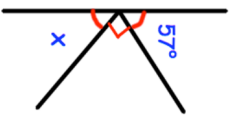


19th April

$$\frac{2}{3} = \frac{\square}{3}$$

20% of 60

Find the size of angle x



Charlie makes 100 chocolate apples to sell at a fair to raise money for charity.

Charlie sells each chocolate apple for £1.

Each chocolate apple needs:

- 1 apple
- 1 stick
- 100g of chocolate.




How much money is left to go to charity?

He pays the following prices

10 apples
cost £2.50

25 sticks
cost 50p

1kg chocolate
costs £4.75



Name: _____

Primary 5-a-day

Gold

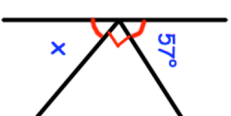


19th April

$$\frac{2}{3} = \frac{\square}{3}$$

20% of 60

Find the size of angle x



Charlie makes 100 chocolate apples to sell at a fair to raise money for charity.

Charlie sells each chocolate apple for £1.

Each chocolate apple needs:

- 1 apple
- 1 stick
- 100g of chocolate.




How much money is left to go to charity?

He pays the following prices

10 apples
cost £2.50

25 sticks
cost 50p

1kg chocolate
costs £4.75



Name: _____

Primary 5-a-day

Gold



21st April

$$25\% = \frac{\square}{\square}$$

$$58,078 + 90,991$$

Grid area for the first problem.

Grid area for the second problem.

A badge costs £1.60

Mr Davies buys 13 badges.

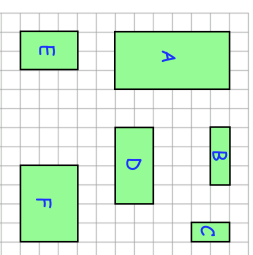
How much does it cost him?

Miss Harding buys some of the same badges.

It costs her £48 in total.

How many did she buy?

Which two rectangles fit together to make a square?



Name: _____

Primary 5-a-day

Gold



21st April

$$25\% = \frac{\square}{\square}$$

$$58,078 + 90,991$$

Grid area for the first problem.

Grid area for the second problem.

A badge costs £1.60

Mr Davies buys 13 badges.

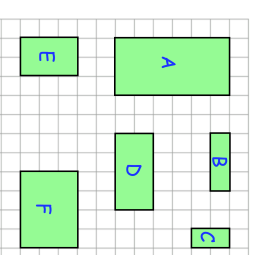
How much does it cost him?

Miss Harding buys some of the same badges.

It costs her £48 in total.

How many did she buy?

Which two rectangles fit together to make a square?



Name: _____

Primary 5-a-day

Gold

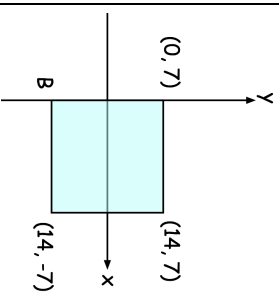


22nd April

$$3,100 \div 1,000$$

$$\begin{array}{r} 135 \\ \times 28 \\ \hline \end{array}$$

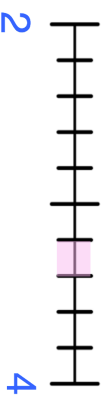
Here is a shaded square



Write down the coordinates of the point B

Circle any of the points that are outside the square

- (1, 8)
- (8, 1)
- (-1, 2)
- (2, -1)



Circle all the numbers below that belong in the shaded part of the number line.

- $3\frac{1}{2}$
- $3\frac{3}{10}$
- $3\frac{1}{4}$
- $3\frac{1}{3}$
- $3\frac{3}{5}$

Name: _____

Primary 5-a-day

Gold

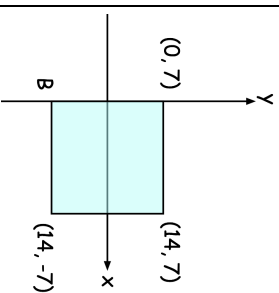


22nd April

$$3,100 \div 1,000$$

$$\begin{array}{r} 135 \\ \times 28 \\ \hline \end{array}$$

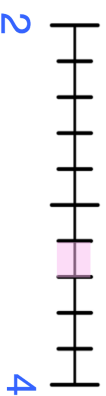
Here is a shaded square



Write down the coordinates of the point B

Circle any of the points that are outside the square

- (1, 8)
- (8, 1)
- (-1, 2)
- (2, -1)



Circle all the numbers below that belong in the shaded part of the number line.

- $3\frac{1}{2}$
- $3\frac{3}{10}$
- $3\frac{1}{4}$
- $3\frac{1}{3}$
- $3\frac{3}{5}$

Name: _____

Primary 5-a-day

Gold

23rd April



<p>12²</p> <p>The rule to get each number in a sequence is subtract the previous number from 120, then divide by 2</p> <p>Write the two missing numbers</p>	<p>75% of 60</p> <p><input type="checkbox"/> 50 <input type="checkbox"/> 35 <input type="checkbox"/> 42.5 <input type="checkbox"/></p>
<p>Conor has three discs. Each disc has a 7 on one side and a 9 on the other.</p> <p>He flips all discs and adds together the three scores.</p> <p>How many different totals can he get using the three discs?</p>	<p>9 7 7</p>

Name: _____

Primary 5-a-day

Gold

23rd April



<p>12²</p> <p>The rule to get each number in a sequence is subtract the previous number from 120, then divide by 2</p> <p>Write the two missing numbers</p>	<p>75% of 60</p> <p><input type="checkbox"/> 50 <input type="checkbox"/> 35 <input type="checkbox"/> 42.5 <input type="checkbox"/></p>
<p>Conor has three discs. Each disc has a 7 on one side and a 9 on the other.</p> <p>He flips all discs and adds together the three scores.</p> <p>How many different totals can he get using the three discs?</p>	<p>9 7 7</p>

Name: _____

Primary 5-a-day

Gold



24th April

$$26 \times 17 = 3,000 - \square$$

Simplify $\frac{300}{1000}$

There are 1,200 fans at a rugby match between Malone and Ballyclare.

75% of the fans support Ballyclare.

How many fans support Malone?



Write down three factors of 60 that are also factors of 45

Two 2-digit numbers multiply to make 198

Write the two missing numbers

$$\square\square \times \square\square = 198$$

Name: _____

Primary 5-a-day

Gold



24th April

$$26 \times 17 = 3,000 - \square$$

Simplify $\frac{300}{1000}$

There are 1,200 fans at a rugby match between Malone and Ballyclare.

75% of the fans support Ballyclare.

How many fans support Malone?



Write down three factors of 60 that are also factors of 45

Two 2-digit numbers multiply to make 198

Write the two missing numbers

$$\square\square \times \square\square = 198$$

Name: _____

Primary 5-a-day

Gold



25th April

$$\square \square \square 3 = 8$$

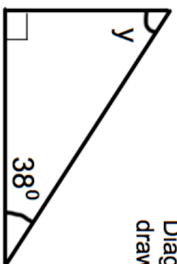
$$\frac{1}{15} + \frac{4}{5}$$

Grid area for the first problem.

Grid area for the second problem.

Find the size of angle y

Diagram not drawn accurately



Arrange in order, from smallest to largest

- $\frac{1}{4}$ 0.19 0.3 26% $\frac{1}{5}$

The cost of hiring a school hall is found by

$$\boxed{\pounds 25 \times \text{number of hours}}$$

Dylan hired the school hall and the total cost was $\pounds 275$

How long did he hire the school hall for?

Name: _____

Primary 5-a-day

Gold



25th April

$$\square \square \square 3 = 8$$

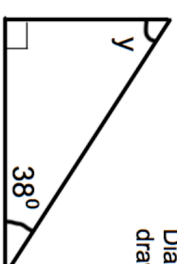
$$\frac{1}{15} + \frac{4}{5}$$

Grid area for the first problem.

Grid area for the second problem.

Find the size of angle y

Diagram not drawn accurately



Arrange in order, from smallest to largest

- $\frac{1}{4}$ 0.19 0.3 26% $\frac{1}{5}$

The cost of hiring a school hall is found by

$$\boxed{\pounds 25 \times \text{number of hours}}$$

Dylan hired the school hall and the total cost was $\pounds 275$

How long did he hire the school hall for?

Name: _____

Primary 5-a-day

Gold



26th April

$$560 \times 1,000$$

$$9.1 - 4.27$$

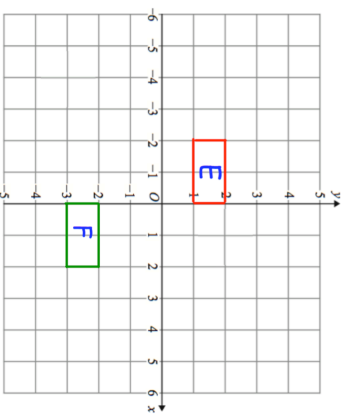
--

--

Put the four masses below in order, starting with the heaviest.

- 650 kilograms
- 0.7 tonnes
- 0.1 kilograms
- 99 grams

Describe the translation



Shape E has been translated to shape F

Plot the point (0, -1)

Name: _____

Primary 5-a-day

Gold



26th April

$$560 \times 1,000$$

$$9.1 - 4.27$$

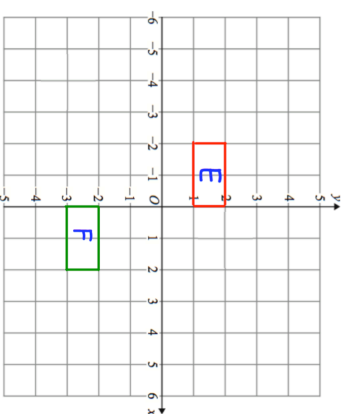
--

--

Put the four masses below in order, starting with the heaviest.

- 650 kilograms
- 0.7 tonnes
- 0.1 kilograms
- 99 grams

Describe the translation



Shape E has been translated to shape F

Plot the point (0, -1)

Name: _____

Primary 5-a-day

Gold



27th April

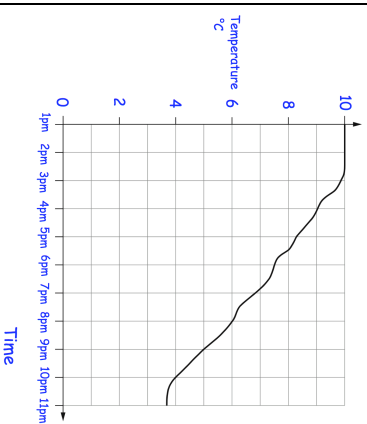
$$\frac{3}{5} = \frac{\square}{45}$$

$$8019 \div 9$$

Draw a 70° angle

This graph shows the temperature in a town from 1pm until 11pm

At what time was the temperature 6°C



By how many degrees Celsius did the temperature fall between 4pm and 8pm?

Name: _____

Primary 5-a-day

Gold



27th April

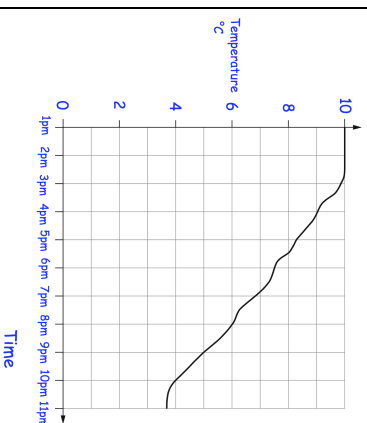
$$\frac{3}{5} = \frac{\square}{45}$$

$$8019 \div 9$$

Draw a 70° angle

This graph shows the temperature in a town from 1pm until 11pm

At what time was the temperature 6°C



By how many degrees Celsius did the temperature fall between 4pm and 8pm?

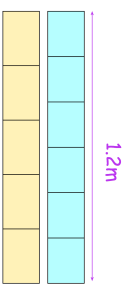


28th April

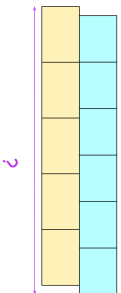
$$4\frac{1}{6} = \frac{\quad}{6}$$

$$\begin{array}{r} 81 \\ \times 67 \\ \hline \end{array}$$

Sian has two strips of paper.
Each strip is 1.2 metres long.
One strip is divided into six equal parts
and the other is divided into five equal
parts.



Sian uses the two strips to make this
shape



What is the total length of Sian's shape?

The numbers in this sequence increase by
8 each time

1 9 17 25 33

The sequence continues in the same way

Will 800 be in the sequence?

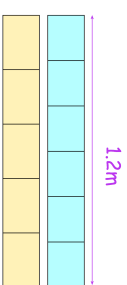


28th April

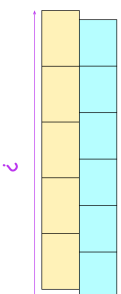
$$4\frac{1}{6} = \frac{\quad}{6}$$

$$\begin{array}{r} 81 \\ \times 67 \\ \hline \end{array}$$

Sian has two strips of paper.
Each strip is 1.2 metres long.
One strip is divided into six equal parts
and the other is divided into five equal
parts.



Sian uses the two strips to make this
shape



What is the total length of Sian's shape?

The numbers in this sequence increase by
8 each time

1 9 17 25 33

The sequence continues in the same way

Will 800 be in the sequence?

Name: _____

Primary 5-a-day

Gold



29th April

$$0.12 \times 1,000$$

$$1\frac{1}{2} \times 3$$

	<input type="text"/>
--	----------------------

	<input type="text"/>
--	----------------------

Claire and Rosie go for a meal.
The meal cost £25.00

Claire leaves a 10% tip.

How much is the tip?



Here are four digit cards
1 6 2 7

Use each digit card once to make the decimal number nearest to 20

<input type="text"/>	<input type="text"/>	.	<input type="text"/>	<input type="text"/>
----------------------	----------------------	---	----------------------	----------------------

Here is a number written in Roman numerals

CCLXIV

Write the number in figures

Name: _____

Primary 5-a-day

Gold



29th April

$$0.12 \times 1,000$$

$$1\frac{1}{2} \times 3$$

	<input type="text"/>
--	----------------------

	<input type="text"/>
--	----------------------

Claire and Rosie go for a meal.
The meal cost £25.00

Claire leaves a 10% tip.

How much is the tip?



Here are four digit cards
1 6 2 7

Use each digit card once to make the decimal number nearest to 20

<input type="text"/>	<input type="text"/>	.	<input type="text"/>	<input type="text"/>
----------------------	----------------------	---	----------------------	----------------------

Here is a number written in Roman numerals

CCLXIV

Write the number in figures

Name: _____

Primary 5-a-day

Gold

30th April



$\frac{7}{20}$ of 1,960

Grid for calculation

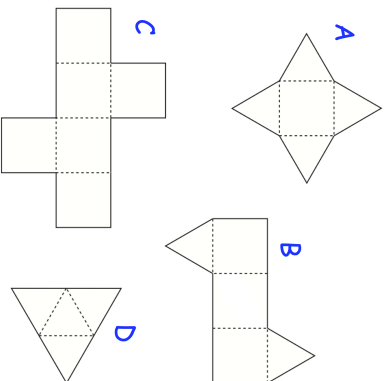
Answer box

406×17

Grid for calculation

Answer box

Here are some nets

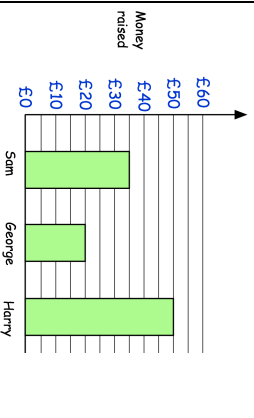


Which letter is the net of a cube?

Grid for answer

Which letter is the net of a triangular prism?

Work out the mean amount of money raised



Name: _____

Primary 5-a-day

Gold

30th April



$\frac{7}{20}$ of 1,960

Grid for calculation

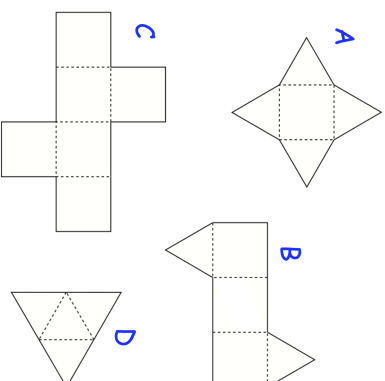
Answer box

406×17

Grid for calculation

Answer box

Here are some nets



Which letter is the net of a cube?

Grid for answer

Which letter is the net of a triangular prism?

Work out the mean amount of money raised

